



**HILLSIDE PRIMARY SCHOOL**  
**BEGINNING OF TERM THREE EXAMINATION**  
**2022**

**SOCIAL STUDIES WITH RELIGIOUS EDUCATION (SET 4)**

*Time Allowed: 2 Hours 15 Minutes*

Index No.

--	--	--	--	--	--	--	--	--	--

Candidate's Name.....

Candidate's Signature.....

EMIS No..... Stream .....

District.....

**Read the following instructions carefully**

1. The paper has **two** sections: **A** and **B**.
2. Answer **all** questions. All answers to both sections **A** and **B** must be written in the spaces provided.
3. **All** answers must be written using a blue or black ball-point pen or fountain pen.
4. Unnecessary changes of work may lead to loss of marks.
5. Any handwriting that cannot easily be read may lead to loss of marks.
6. Do not fill anything in boxes indicated: "**For Examiners' Use Only**" and those inside the paper.

FOR EXAMINERS' USE ONLY		
Qn. No.	MARKS	EXRS' NO
1-10		
11-20		
21-30		
31- 40		
41- 43		
44- 46		
47- 49		
50- 52		
53- 55		
TOTAL		

**1 Turn Over**

## SECTION A (40 MARKS)

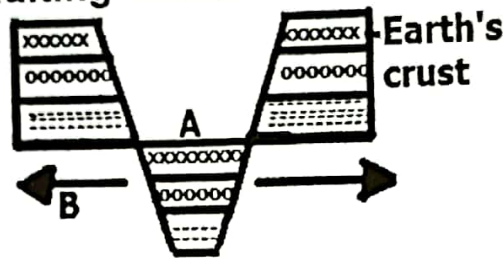
1. Name the line of latitude which is used to locate the center of the earth.

.....

2. Give the meaning of the term weather.

.....

Study the diagram of faulting below and answer questions 3 – 4.



3. Name the forces marked with letter B.

.....

4. Why is part A generally hot?

.....

5. Mention one economic challenge affecting development in Africa.

.....

6. Mention any one example of a cultural practice in your community.

.....

7. How are active volcanoes dangerous in an area?

.....

8. State on way the government can discourage Rural- Urban migration.

.....

9. Give one example of behaviour expected of a good citizen.

.....

10. Why are national symbols important to a country?

.....

11. State any one reason why Uganda trades with other countries.

.....

12. Who is the political head of a district in Uganda?

.....

13. State any one way of conserving the environment.

.....

14. Name the newest member state of the East African Community.

.....

15. Give one way in which Pre-colonial people were organized.

.....

16. How is can large population be a disadvantage to a country like Uganda?

.....

17. Why was the East African Community revived?

.....

18. Which mineral is mainly got from the Zambian copper belt?

.....

19. Mention any one example of a primary industry.

.....

20. What role did Bishop Desmond Tutu play towards the end of apartheid policy in South Africa?

.....

21. State one reason why the Portuguese conquered the coast of East Africa.

.....

22. Write UNESCO in full.

.....

**Study the weather chart below and answer questions (23- 25)**

<b>Days</b>	Sunday	Monday	Tuesday	Wednesday	Thursday
<b>Weather</b>	Cloudy	Humid	Rainy	Sunny	Windy

23. Name the day when farmers dry their harvested crops.

.....

24. What did meteorologists use to record weather on Wednesday?

.....

25. Which condition of weather was recorded on Tuesday?

.....

26. What do the olive leaves on the AU Flag symbolize?

.....

27. How does a large population affect natural forests?

.....

28. What is the use of a compass to a sailor?

.....

29. Why is irrigation farming commonest in North Africa?

.....

30. What does the sun represented on the Uganda Coat of Arms?

.....

31. Why did Ethiopia remain uncolonized?

.....

32. Name the map symbol below.



.....

33. How is Cocoa important to farmers in Ivory Coast?

.....

34. What is meant by the term **national budget**?

.....

.....

35. Compare the Cape ranges and Mount Atlas in terms of their formation.

.....

For questions 36- 40, answer either Christianity or Islam but not both.

36. **Either:** What does wine represent in Holy Eucharist?

.....

**OR:** Why should a Moslem read Surat Nas every day?

.....

37. **Either:** Give one way Jesus showed power over death.

.....

**OR:** Give one way Prophet Mohammed showed power over death.

.....

38. **Either:** Who was the last prophet according to Christianity?

.....

**OR:** Who was the last prophet according to Islam?

.....

39. **Either:** Why did Judas Iscariot commit suicide after betraying Jesus?

.....

**OR:** Why did do Moslems perform ablution before prayer?

.....

40. **Either:** Mention the message that was brought to Mary by Angel Gabriel.

.....

**OR:** Which message was brought to Prophet Muhammad by Angel Jibril?

.....

**SECTION B (60 MARKS)**

41. (a) Give two rights of a citizen of Uganda.

(i) .....

(ii) .....

(b) State two responsibilities of a citizen of Uganda.

(i) .....

(ii) .....

42. (a) Name the country where the following historical sites are found.

(i) Olduvai Gorge .....

(ii) Sango Bay .....

(iii) Fort Jesus .....

(b) How are historical sites economically important to a country?

.....

43. (a) Name the governor who exiled Kabaka Edward Fredrick Muteesa II.

.....

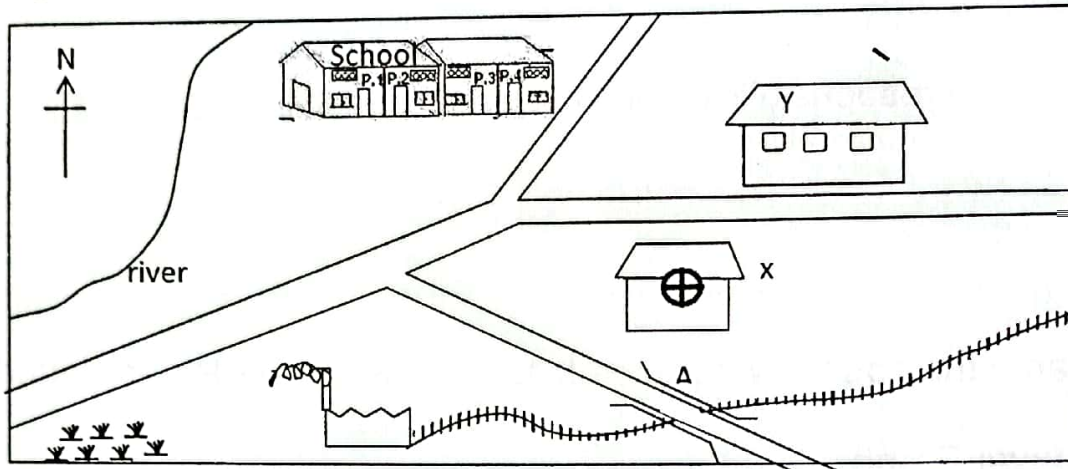
(b) Give one reason why Kabaka Edward Fredrick Muteesa II was exiled.

.....

c) Give two ways in which Africans reacted towards colonial administration.

- (i) .....
- (ii) .....

43. Study the diagram below and answer the questions that follow.



(a) Mention any two social services provided in the above area.

- (i) .....
- (ii) .....

(b) What is the direction of the school from the factory?

.....

(c) Name the feature marked with letter A on the diagram above.

.....

45. (a) Mention two ways of caring for a school compound.

- (i) .....
- (ii) .....



(b) Which organization is in charge of each of the following vegetation areas in Uganda?

(i) Forests

.....

(iv) Swamps

.....

46. (a) State two causes of the migration of people in a district.

i) .....

ii) .....

(b) Give any two effects of rural - urban migration.

i) .....

ii) .....

47. a) What mineral is mined from Witwatersrand in South Africa?

.....

b) Mention any two factors that have promoted the development of mining in South Africa.

i) .....

ii) .....

c) State any **one** danger of the mining industry to the environment.

.....

48. (a) Which processes led to the formation of the drainage features below?

(i) Lake Victoria .....

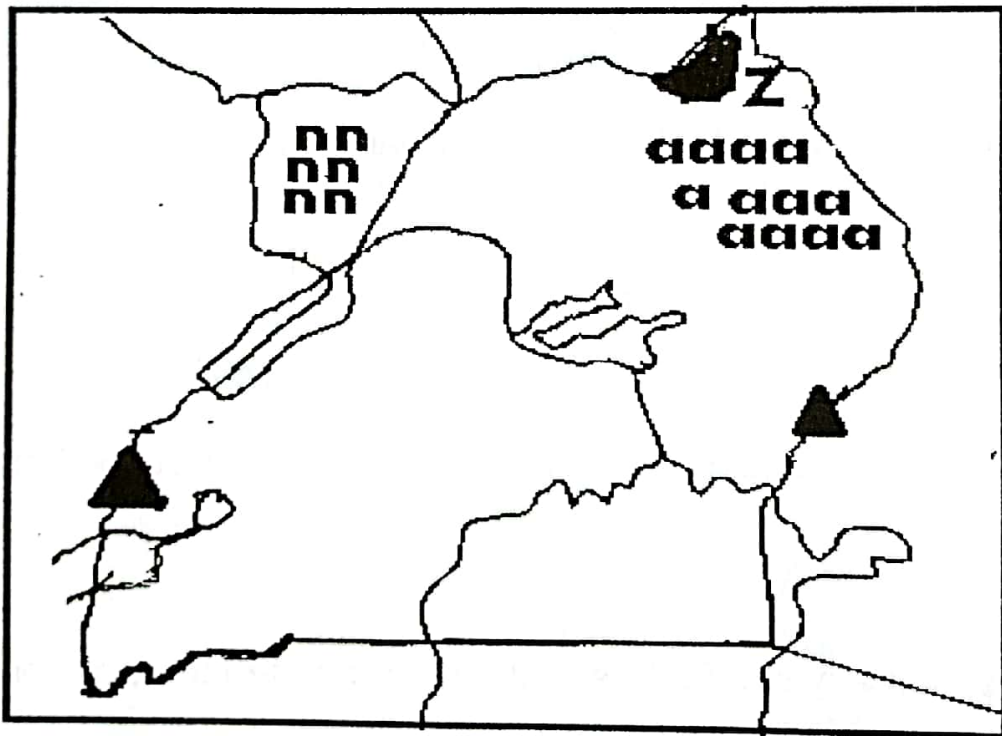
(ii) Lake Katwe. ....

(b) Mention any two importance of lakes to people.

(i) .....

(ii) .....

49. Study the map below and answer the questions that follow.



(a) Name the human activity carried out in climatic zone marked aaa:

.....

(b) Use letter M to locate mount Rwenzori on the map above.

(c) Which national park is found in the shaded area marked **Z**?

.....

(d) Name the agricultural activity done in area marked **nnn**.

.....

50. (a) Give two reasons why African countries formed common markets.

(i) .....

(ii) .....

(b) State any two problems faced by common markets.

(i) .....

(ii) .....

**For questions 51 – 55, answer either Christianity or Islamic but not both.**

51. **Either:** (a) Why did God give Israelites the ten commandments?

.....

(b) Who led the Israelites to Canaan?

.....

c) Mention any two commandments that God gave to Israelites.

(i) .....

(ii) .....

**Or:** a) State two pillars of Islam.

(i) .....

(ii) .....

(b) How is Shahadat important in Islam?

.....

c) Who led the Ban – Israel from Egypt?

.....

**52. Either:** Why was Jesus born?

.....

(b) Give two ways in which Jesus served people.

(i) .....

(ii) .....

(c) Give one way Christian children follow the example of Jesus.

.....

- **Or:** a) Name the uncle that brought up Prophet Muhammad.

.....

(b) Write one way Prophet Muhammad served his uncle.

.....

(c) Give one way Muslim children follow the example of Prophet Muhammad.

.....

(d) What lesson do we learn from Muhammad's service to his uncle?

.....

**53. Either:** a) Give any one reason why we need to help each other in the community.

.....

(b) Mention any two ways God fearing people help others.

(i) .....

(ii) .....

(c) Give any one group of people in the community who need help.

.....

**Or:** (a) Give any one reason why we need to help each other in the community.

.....

(b) Mention any two ways Allah fearing people help others.

(i) .....

(ii) .....

(c) Give any one group of people in the community who need help.

.....

**54. Either:** a) Why did Jesus Christ choose Apostles?

.....

b) Name the first two apostles to be called by Jesus.

(i) .....

(ii) .....

b) Give one quality Jesus showed as a good leader.

.....

**Or:** a) Name two of the caliphs of Prophet Muhammad.

(i) .....

(ii) .....

(b) Give two qualities Prophet Muhammad showed as a good leader.

(i) .....

(ii) .....

55. **Either:** Give any two acts of faith in Christianity.

(i) .....

(ii) .....

(b) Mention any two ways Christians benefit from offering to the needy.

(i) .....

(ii) .....

**Or:** a) Give two acts of faith in Islam.

(i) .....

(ii) .....

(b) Mention two ways in which Moslems benefit from offering to the needy.

(i) .....

(ii) .....

**END**